






RED ROSE SENIOR SECONDARY SCHOOL  
MATHS WORKSHEET 4  
CLASS - 1

Q1. Find the following shapes from the given picture. Squares, Rectangles, Circles and Triangle.  
Colour the squares - red, rectangles - blue, circles - yellow, and triangle - green.



Q2. Fill ups.

	This 2D shape is a _____. It has _____ sides It has _____ corners.
	This 2D shape is a _____. It has _____ sides It has _____ corners.
	This 2D shape is a _____. It has _____ sides It has _____ corners.
	This 2D shape is a _____. It has _____ sides It has _____ corners.

triangle   square   rectangle   circle